

EDU 330

Sample Intelligence Test

**1. Which number should come next in this series?**

1, 4, 9, 16, 25, \_\_\_\_\_

Answer: \_\_\_\_\_

**2. Which number should come next in this series?**

3,5,8,13,21, \_\_\_\_\_

Answer: \_\_\_\_\_

**3. Which number does not belong?**

4	32	144
17	28	122
18	64	188
322	14	202

Answer: \_\_\_\_\_

**4. What is the missing letter?**

E	C	O
B	A	B
G	B	N
D	B	?

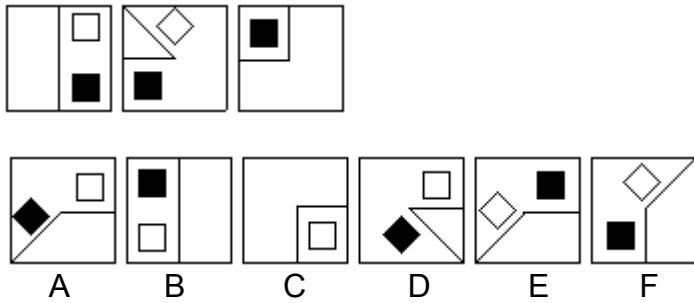
Answer: \_\_\_\_\_

**5. Which two words are closest in meaning?**

Composite, synthetic, shabby, different, pseudo, symbolic

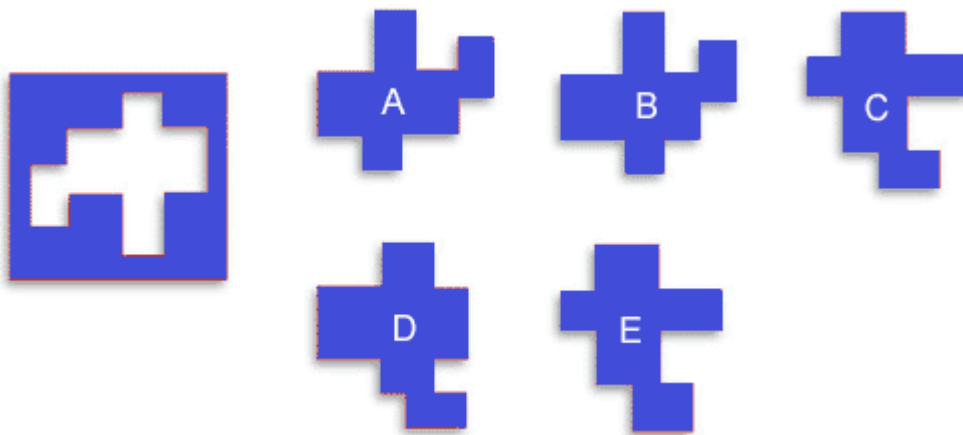
Answer: \_\_\_\_\_

6. Find the picture that follows logically from one of the six below.



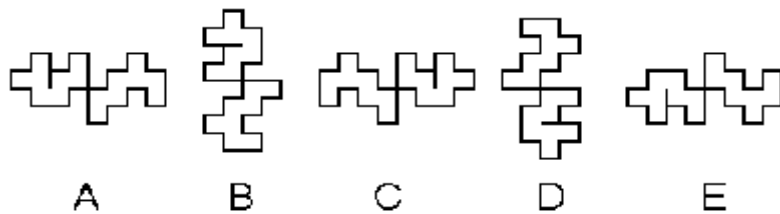
Answer: \_\_\_\_\_

7. Pick the piece that's missing from the diagram on the left



Answer: \_\_\_\_\_

8. Which figure is different from the others?



Answer: \_\_\_\_\_